
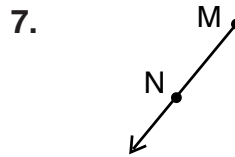
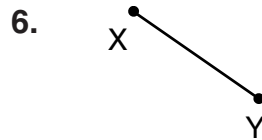
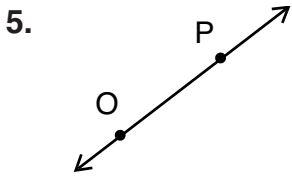
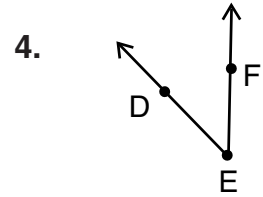
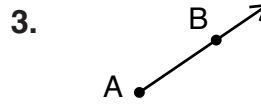
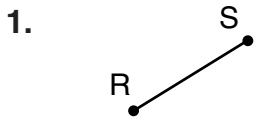


Name \_\_\_\_\_ Date \_\_\_\_\_

## Geometric Figures

Identify each figure. Then name it using symbols.



Draw each.

9. point  $P$

10.  $\overline{ST}$

11.  $\vec{EF}$

12.  $\angle XYZ$

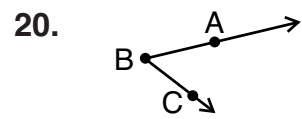
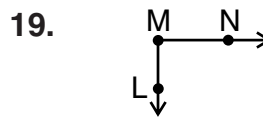
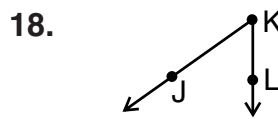
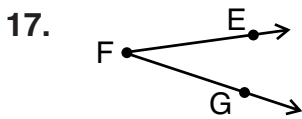
13. plane  $PQR$

14.  $\overleftrightarrow{MN}$

15.  $\overline{AB}$

16.  $\vec{ZA}$

Name each angle three ways.



Write as many names as you can for the line below.

(Hint: A line is named by using any two of its points in any order.)

