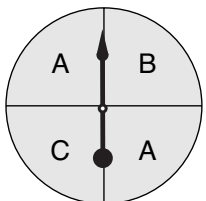
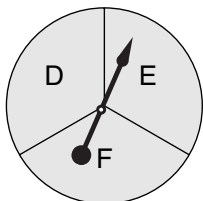


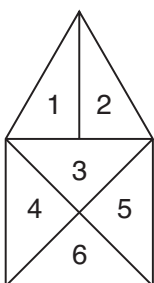
Name _____ Date _____

Equally/Not Equally Likely Outcomes

For each experiment list the possible outcomes. Then write whether the outcomes are *equally likely* or *not equally likely*.

1.  _____

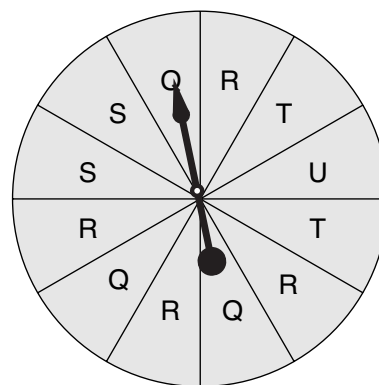
2.  _____

3. Toss a marker on the figure.  _____

4. A bowl contains 8 marbles: 2 white, 2 red, 2 orange, and 2 black. Choose a marble without looking. _____

Use the spinner on the right to find the probability of the spinner landing on:

- 5. T _____
- 6. Q _____
- 7. S _____
- 8. U _____
- 9. R _____



Use the spinner on the right to find the probability of the spinner landing on:

- 10. Y _____
- 11. X _____
- 12. W _____
- 13. Z _____

